


USING THESE SLIDES.

Recall- 5 min activity to recall children's knowledge

Guided practice- work through together, teaching the new skills.

Intelligent practice- 10 minute independent fluency activity.

Dive deeper- These activities should take the longest. Children should think deeper and reason their answers. E.g. This is the answer because...
They may also prove their answer using a drawing, diagram etc.



The angry chilli offers a further challenge for the children.

RECALL

What should we use to measure the length of a bed?

Paper clips or books?

What should we use to measure the length of a book?

Cubes or a table?

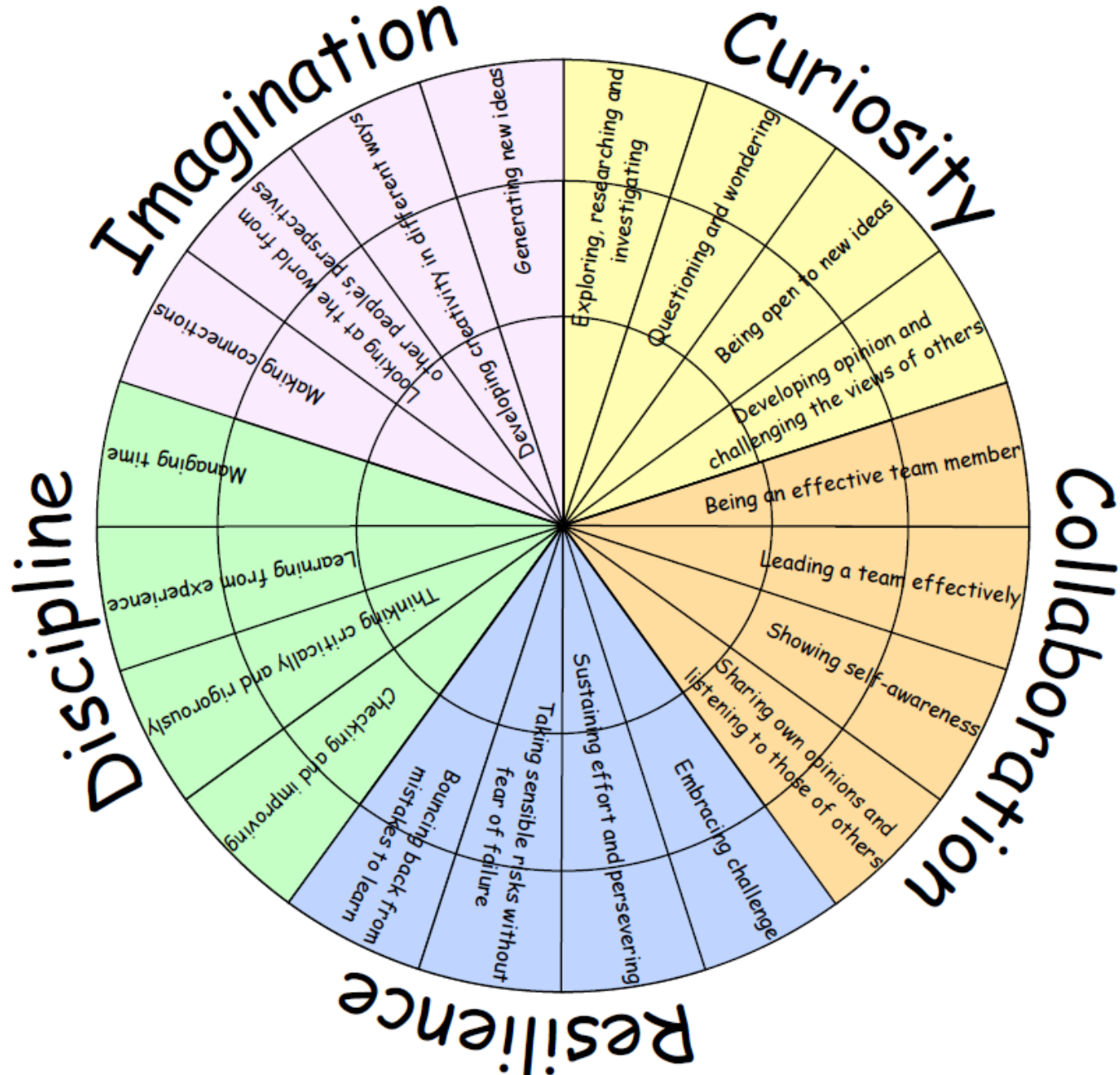
How many cubes long is the line?



I CAN MEASURE LENGTHS (NON-STANDARD).

MEASUREMENT: LENGTH AND HEIGHT

LEARNING HABITS?



GUIDED PRACTICE:


How can ensure that my measuring is accurate?

-
-
-
-

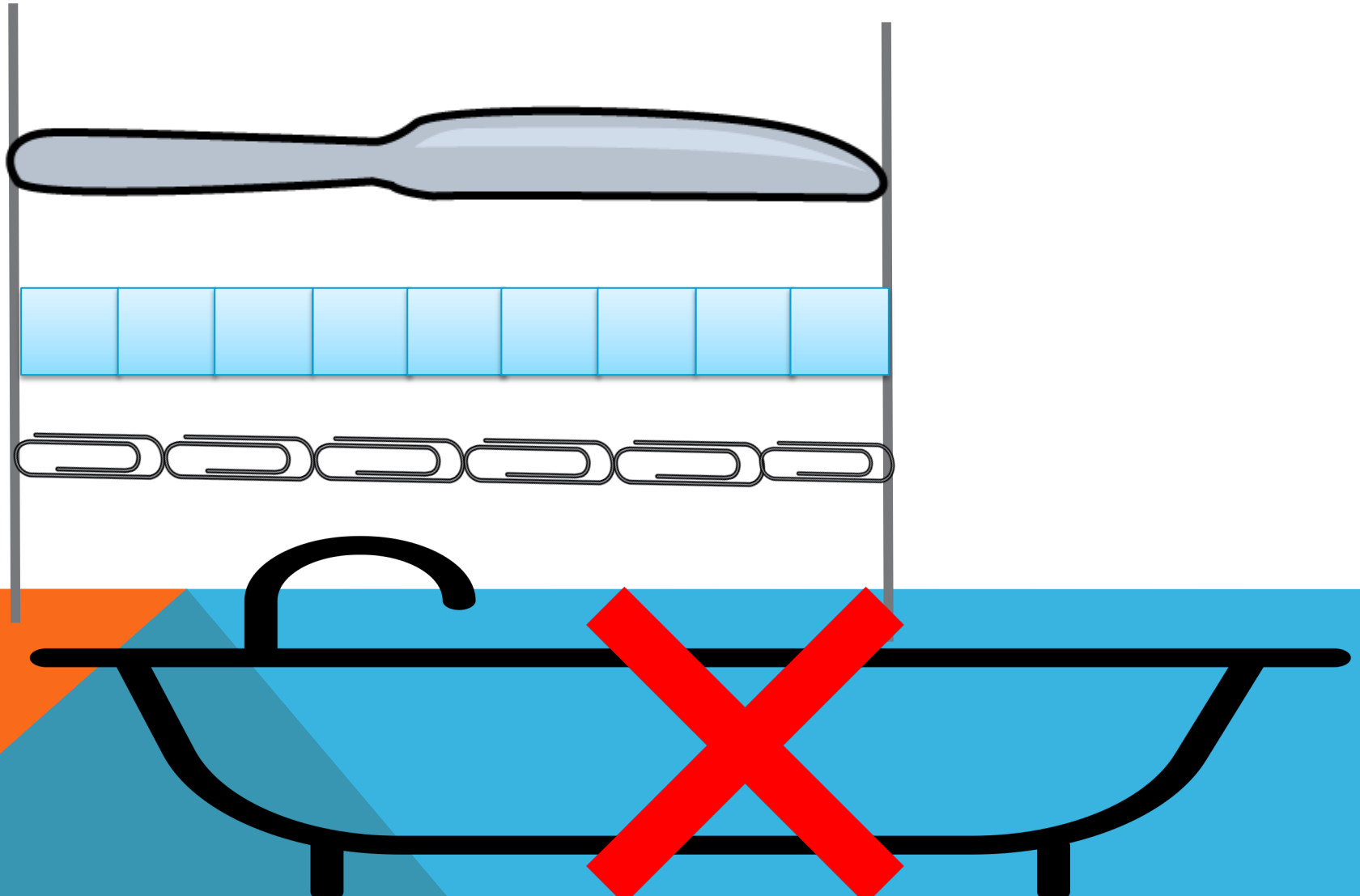


GUIDED PRACTICE:

How can ensure that my measuring is accurate?

- . I begin measuring at the start and stop at the end.
 - . I use the same objects to measure and they are the same size.
 - . My objects are close together.
 - . My objects are a good choice for the size of the thing I am measuring.
- 

GUIDED PRACTICE



GUIDED PRACTICE:

Can you measure your pencil accurately?


Can you measure your table?

Can you find an object that is 5 cubes long?

Can you find an object that 3 books long?



INTELLIGENT PRACTICE: MEASURING LENGTH



Can you draw a line that is 2 blocks long?



Can you draw a line that is 6 blocks long?



Tick the line that is 5 blocks long



Can you draw a line that is 5 blocks long?



Can you draw a line that is 4 blocks long?



Tick the line that is 3 blocks long



Can you draw a line that is 8 blocks long?



Can you draw a line that is 7 blocks long?



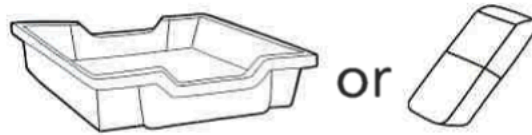
DIVE DEEPER 1:

What would you use to measure the following?

The length of a table

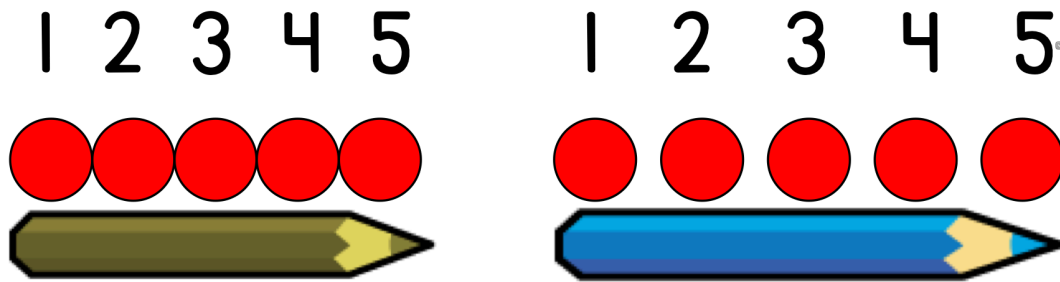


The length of your shoe



DIVE DEEPER 2:

True or false?



The pencils are the same length.

DIVE DEEPER 3:

How many objects can you find that are 6 cubes/bricks long?



SELF-ASSESSMENT

L.O. To compare length. 03.03.2021

Some will even: choose which non-standard unit to use for the correct object.

Some will: Measure accurately.

Most will: Measure using non-standard units.

All will: understand what length is.