

GEOGRAPHY – EUROPE

LO: TO LOCATE COUNTRIES IN EUROPE ON A RANGE OF WORLD MAPS.

(ATLAS, GLOBE, AERIAL IMAGES AND DIGITAL MAPPING TECHNOLOGY – GOOGLE EARTH)

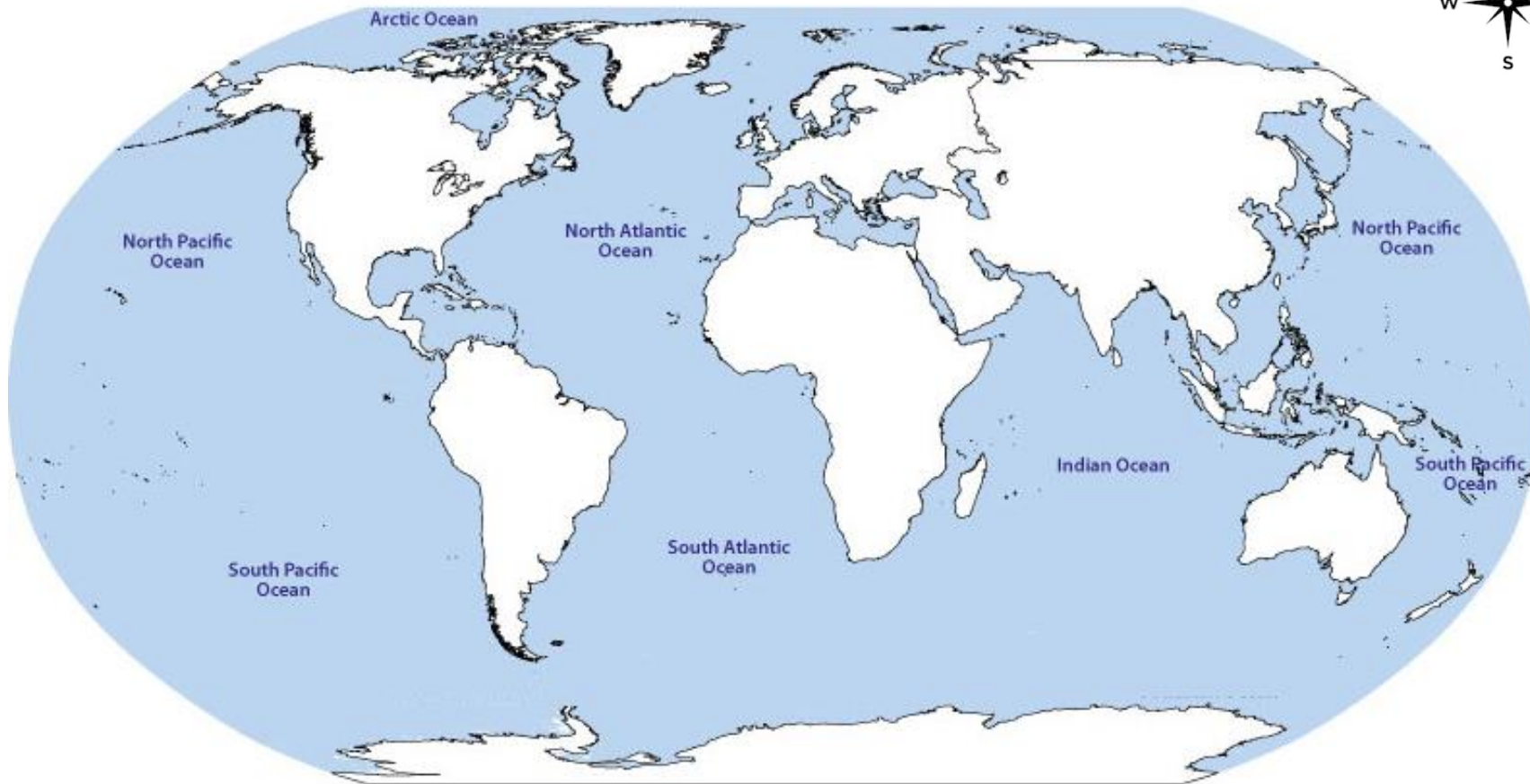


RECAP I

POSITIONING OF THE CONTINENTS



- Name and label the seven continents.



- Which continent is south of Europe?
- Which continent is north of Australia?
- Which continent is west of Africa?
- Which continent is east of North America?

RECAP 2



RECOGNISING THE CONTINENTS



Label this GoogleEarth images of the continent.

Look carefully at their shapes, as I have rotated the globe to capture these images.

- North America
- South America
- Africa
- Asia
- Antarctica
- Australia

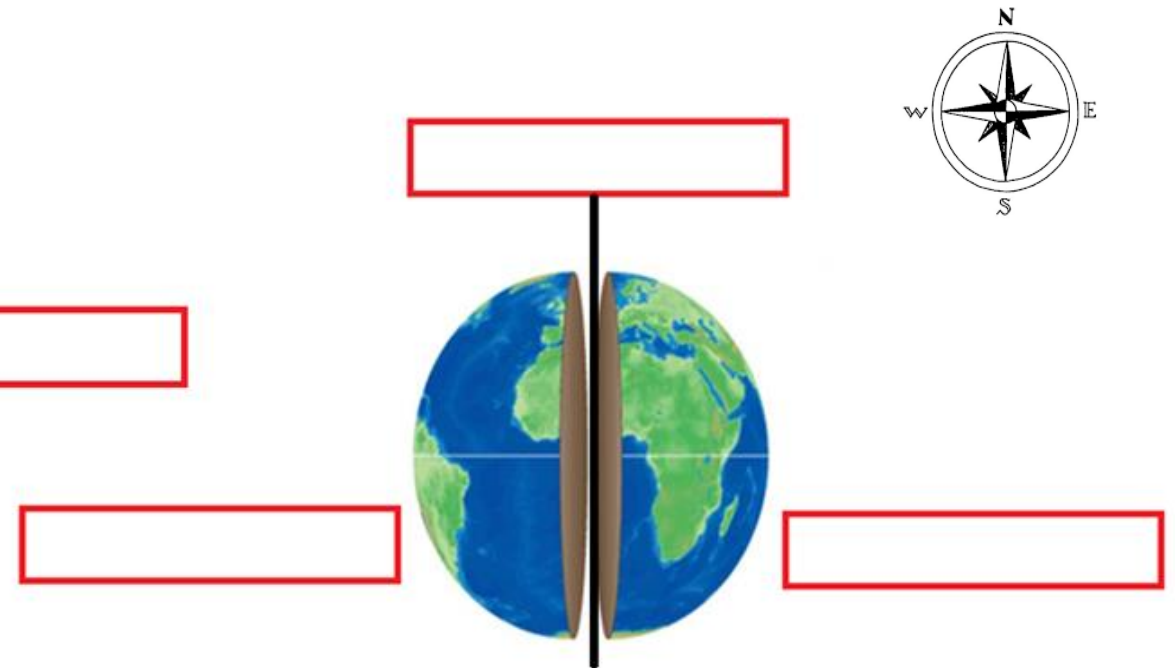
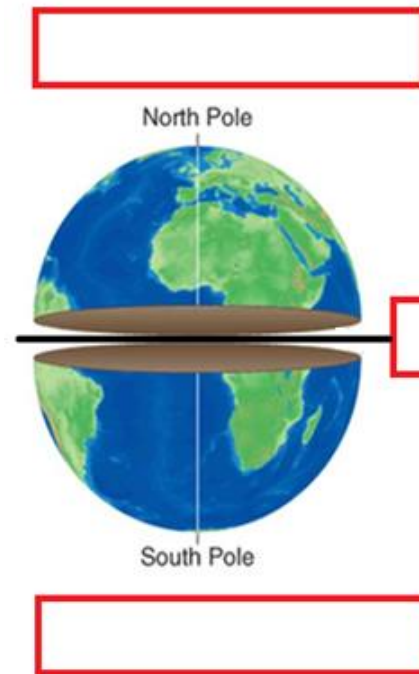


RECAP 3: GEOGRAPHICAL VOCABULARY



Label these on the globe

- Equator
- Northern Hemisphere
- Southern Hemisphere
- Prime Meridian
- Eastern Hemisphere
- Western Hemisphere





This is what Europe looks like from space.

There are some connected countries linked together (little bit like a jigsaw puzzle)

There are some little islands. Can you spot them?

Looking at the colours on the land, what can you tell me about Europe?

Let's explore

<https://earth.google.com/web/@40.52766488,23.82635291,1405.79411224a,13406739.77213144d,35y,0h,0t,0r>

EUROPE - COUNTRIES

There are 44 different countries within the continent of Europe.

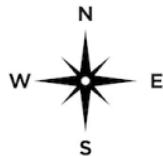
Challenge: Locate these quickly on the European map

- United Kingdom (England, Ireland, Scotland, Wales)
- France
- Spain
- Portugal
- Germany
- Poland
- Romania
- Italy
- Greece
- Iceland
- Norway
- Sweden
- Finland



LABELLING

How many of these
countries can you
correctly label?



EXTENSION - LANDMARKS IN EUROPE



Which countries do these landmarks belong to?



Eiffel Tower



Colosseum



Parthenon



Big Ben



Notre-Dame Cathedral



La Sagrada Familia



St Basil's Cathedral

EXTENSION – FLAGS OF EUROPEAN COUNTRIES



Which countries do these flag belong to?

